

1. (a) Solve.

$$4x + 3 = 13$$

(a) $x = \dots\dots\dots$ [2]

(b) Multiply out and simplify.

$$5(2x + 3) + 2(x - 4)$$

(b) $\dots\dots\dots$ [3]

2. Dora has the following number cards.



She takes a card at random, replaces the card and then takes a second card. She adds the numbers on the two cards she has taken and records the total.

(a) Complete the following table to show all of her possible totals.

		First card				
		2	2	3	5	6
Second card	Total					
	2	4	4	5	7	8
	2	4	4	5		8
	3	5	5		8	9
	5	7		8	10	11
6	8	8	9	11	12	

[1]

(b) Find the probability that her total is

(i) an even number,

(b)(i) [2]

(ii) a multiple of 3 or 4.

(ii) [2]

3. A clock chimes every 20 minutes.
A light flashes every 8 minutes.
The clock chimes and the light flashes together at 08:00.

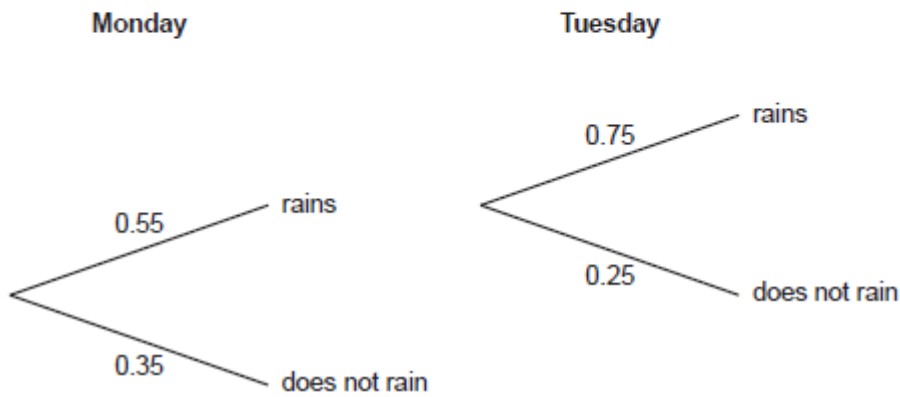
How many times between 08:01 and 12:30 will the clock chime and the light flash together?
Show your working.

..... [5]

4. A weather forecast says

- the probability that it will rain on Monday is 0.55
- and
- the probability that it will rain on Tuesday is 0.25.

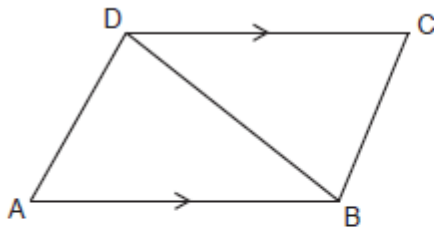
Ella draws a tree diagram to show this information.



Write down three errors that Ella has made with her tree diagram.

- 1
 - 2
 - 3
- [3]

5. In the diagram, AB and DC are parallel lines of equal length.



Not to scale

Prove that angle DAB = angle BCD.

..... [4]

6. (a) Work out.

$$16^{-\frac{1}{2}}$$

(a) [2]

- (b) Simplify.

$$\sqrt{6} \times \sqrt{3}$$

(b) [2]

7.

The price, $\pounds P$, of a car is $\pounds 20\,000$ in 2019.
The price is expected to decrease by 5% each year after 2019.

(a) Jasmine says

This means the price in 2021 is expected to be $\pounds 18\,000$.

She is incorrect.

Explain her error and work out the correct answer.

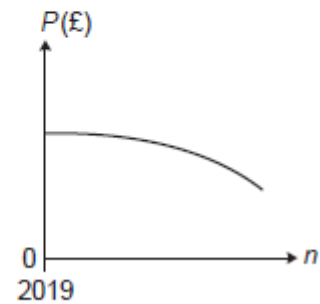
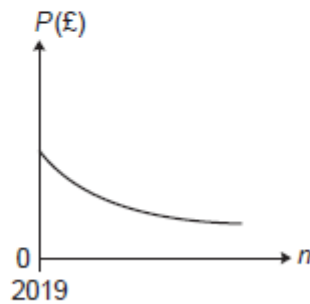
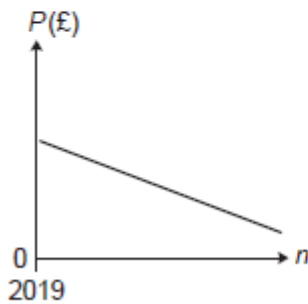
Her error is

The correct answer is \pounds [4]

(b) (i) Write a formula for P in terms of n , where n is the number of years after 2019.

(b)(i) $P =$ [2]

(ii) Circle the graph that best represents the price, $\pounds P$, of the car n years after 2019.



[1]

8. Simplify.

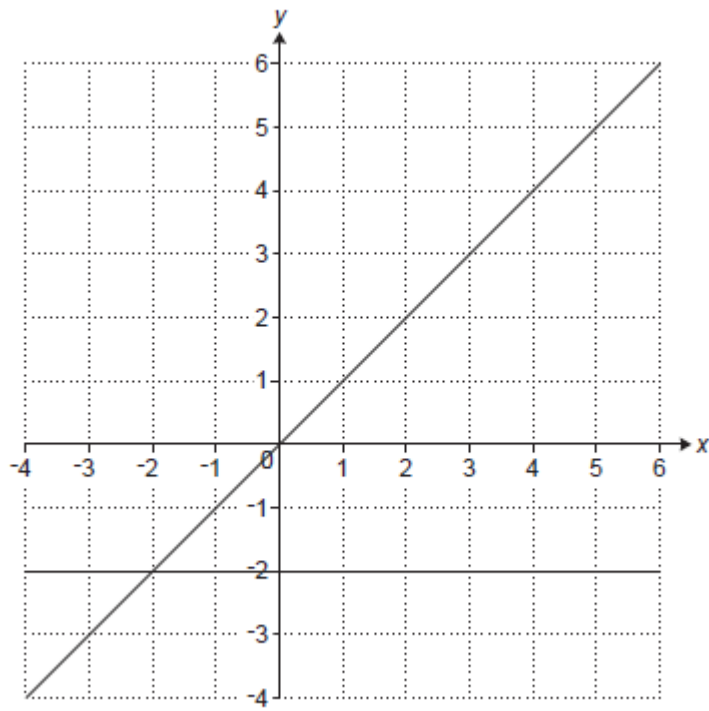
(a) $4a^{\frac{1}{2}} \times 3a^2$

(a) [2]

(b) $\left(\frac{2a^2}{a^{-3}}\right)^3$

(b) [3]

9. The graphs of $y = x$ and $y = -2$ are drawn on the grid.




The region R satisfies the following inequalities.

$$y \geq -2 \quad y \leq x \quad y < 4 - 2x$$

By drawing one more line, find and label the region R.

[5]

10. ABCD is a trapezium.



Not to scale

The perimeter of the trapezium is 56 cm.
The ratio $AD : AB : DC : BC = 5 : 12 : 6 : 5$.

Calculate the area of the trapezium.
Show your working.

..... cm² [7]

Total Marks for Question Set 5: 50

OCR

Oxford Cambridge and RSA

Copyright Information

OCR is committed to seeking permission to reproduce all third-party content that it uses in its assessment materials. OCR has attempted to identify and contact all copyright holders whose work is used in this paper. To avoid the issue of disclosure of answer-related information to candidates, all copyright acknowledgements are reproduced in the OCR Copyright Acknowledgements Booklet. This is produced for each series of examinations and is freely available to download from our public website (www.ocr.org.uk) after the live examination series.

If OCR has unwittingly failed to correctly acknowledge or clear any third-party content in this assessment material, OCR will be happy to correct its mistake at the earliest possible opportunity.

For queries or further information please contact The OCR Copyright Team, The Triangle Building, Shaftesbury Road, Cambridge CB2 8EA.

OCR is part of the Cambridge Assessment Group; Cambridge Assessment is the brand name of University of Cambridge Local Examinations Syndicate (UCLES), which is itself a department of the University of Cambridge